

Bayesian Networks

Alice Gao

Lecture 12

Readings: RN 14.2. PM 8.3.

Outline

Learning Goals

D-Separation

Constructing Bayesian Networks

Revisiting the Learning goals

Learning Goals

By the end of the lecture, you should be able to

- ▶ Determine whether an independence relationship holds by applying d-separation.
- ▶ Given a Bayesian network and an order of the variables, construct a Bayesian network that correctly represents the independence relationships among the variables.

Learning Goals

D-Separation

Constructing Bayesian Networks

Revisiting the Learning goals

D-Separation

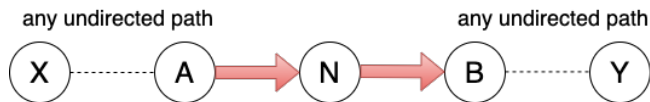
Are two variables X and Y independent given the set of observed variables E ?

Definition (D-Separation)

E d-separates X and Y
iff E blocks every un-directed path between X and Y .

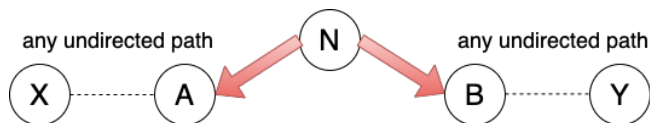
If E d-separates X and Y ,
then X and Y are independent given E .

Blocked Path - Scenario 1/3



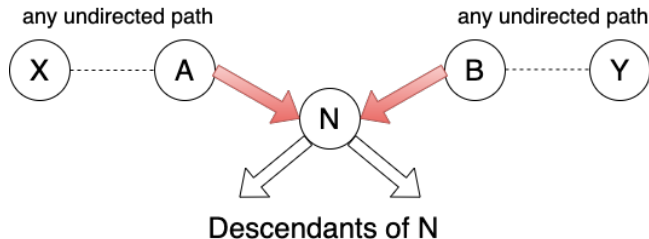
If N is observed,
then it blocks the path between X and Y.

Blocked Path - Scenario 2/3



If N is observed,
then it blocks the path between X and Y.

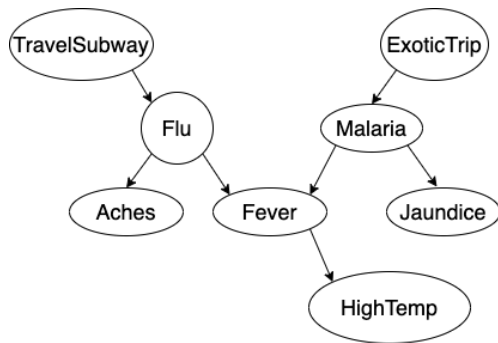
Blocked Path - Scenario 3/3



If N and N's descendants are NOT observed,
then they block the path between X and Y.

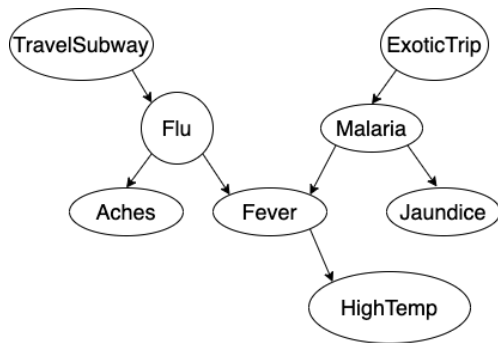
CQ: Applying D-separation

CQ 1a: Are **TravelSubway** and **HighTemp** independent?



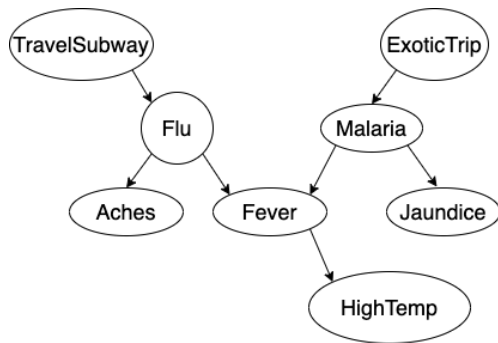
CQ: Applying D-separation

CQ 1b: Are **TravelSubway** and **HighTemp** independent given **Flu**?



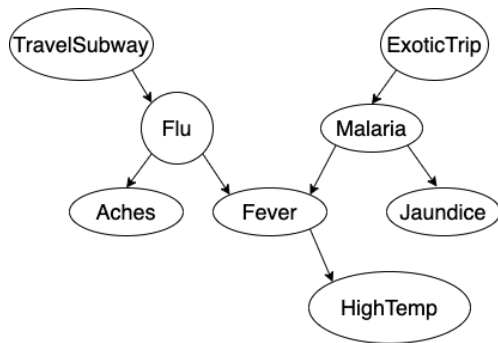
CQ: Applying D-separation

CQ 2a: Are **Aches** and **HighTemp** independent?



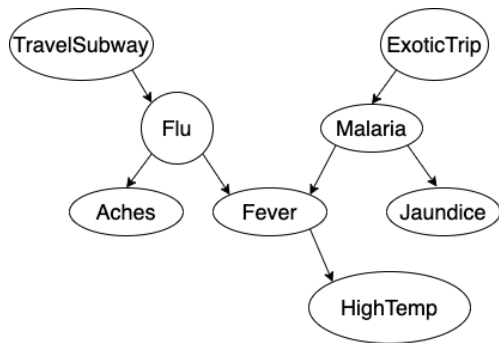
CQ: Applying D-separation

CQ 2b: Are **Aches** and **HighTemp** independent given **Flu**?



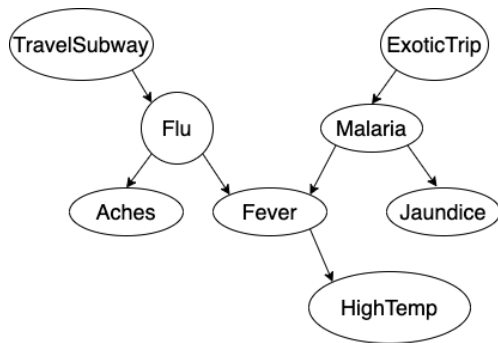
CQ: Applying D-separation

CQ 3a: Are **Flu** and **ExoticTrip** independent?



CQ: Applying D-separation

CQ 3b: Are **Flu** and **ExoticTrip** independent given **HighTemp**?



Learning Goals

D-Separation

Constructing Bayesian Networks

Revisiting the Learning goals

Constructing Bayesian Networks


- ▶ For a joint probability distribution, there are many correct Bayesian networks.
- ▶ Given a Bayesian network A, a Bayesian network B is correct if and only if

If Bayesian network B requires two variables to satisfy an independence relationship, Bayesian network A must also require the two variables to satisfy the same independence relationship.

- ▶ Prefer a Bayesian network that requires fewer probabilities.

Requiring an Independence Relationship

- ▶ Having an edge between two variables DOES NOT mean that the two variables are DEPENDENT.



- ▶ The absence of an edge between two variables MEANS that the two variables satisfy an INDEPENDENCE relationship.



Constructing a Correct Bayesian Network

1. Order the variables $\{X_1, \dots, X_n\}$.
2. For each variable X_i in the ordering,

2.1 Choose the node's parents:

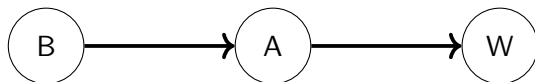
Choose the smallest set of parents from $\{X_1, \dots, X_{i-1}\}$ such that given $Parents(X_i)$ X_i is independent of all the nodes in $\{X_1, \dots, X_{i-1}\} - Parents(X_i)$. Formally,

$$P(X_i | Parents(X_i)) = P(X_i | X_{i-1} \wedge \dots \wedge X_1).$$

- 2.2 Create a link from each parent of X_i to the node X_i .
- 2.3 Write down the conditional probability table $P(X_i | Parents(X_i))$.

Example 1: Construct a Bayes Net

Consider the Bayesian network.

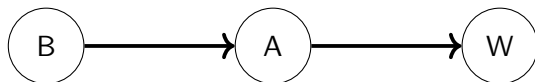


Construct a correct Bayesian network by adding the variables in the order: W, A, and B.

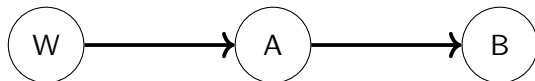


Example 1: Construct a Bayes Net

Consider the Bayesian network.

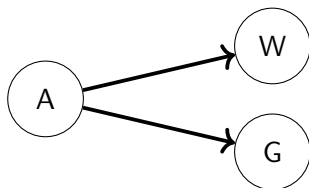


Construct a correct Bayesian network by adding the variables in the order: W, A, and B.



Example 2: Construct a Bayes Net

Consider the Bayesian network:

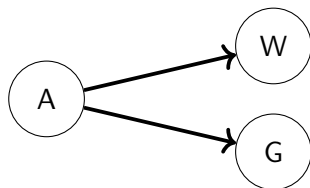


Construct a correct Bayesian network by adding the variables in the order: W, G, and A.

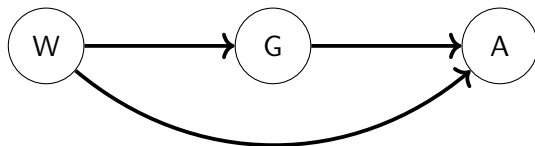


Example 2: Construct a Bayes Net

Consider the Bayesian network:

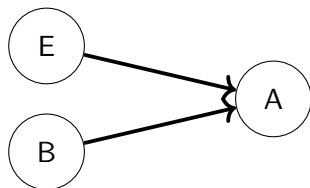


Construct a correct Bayesian network by adding the variables in the order: W, G, and A.

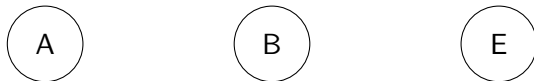


Example 3: Construct a Bayes Net

Consider the Bayesian network.

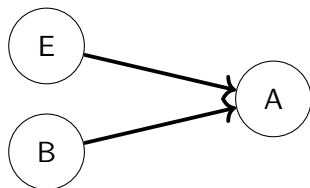


Construct a correct Bayesian network by adding the variables in the order: A, B, and E.

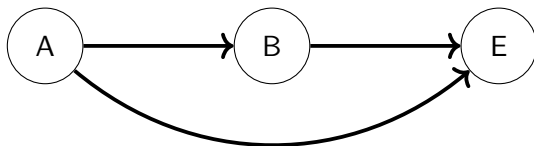


Example 3: Construct a Bayes Net

Consider the Bayesian network.



Construct a correct Bayesian network by adding the variables in the order: A, B, and E.



Revisiting the Learning Goals

By the end of the lecture, you should be able to

- ▶ Determine whether an independence relationship holds by applying d-separation.
- ▶ Given a Bayesian network and an order of the variables, construct a Bayesian network that correctly represents the independence relationships among the variables.